

Time: 10 Minutes	Paper Math 3	Total Marks: 10
-------------------------	---------------------	------------------------

5th Month, 4th Week, 1st Day	Syllabus: Unit 5. Revision Exercise. Q # 1.
------------------------------	--

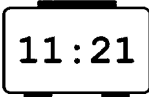
Q.1. Match the time of analog clock with digital clock in the following figures. (10)

درج ذیل اشکال میں اینالاگ کلاک کو ڈیجیٹل کلاک سے ملائیں۔



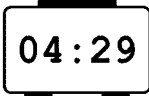
•

•




•

•




•

•



•

•



Time: 10 Minutes	Paper Math 3	Total Marks: 10
-------------------------	---------------------	------------------------

5th Month, 4th Week, 1st Day	Syllabus: Unit 5. Revision Exercise. Q # 1.
------------------------------	--

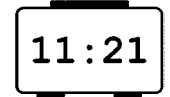
Q.1. Match the time of analog clock with digital clock in the following figures. (10)

درج ذیل اشکال میں اینالاگ کلاک کو ڈیجیٹل کلاک سے ملائیں۔



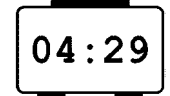
•

•




•

•



•

•



•

•

